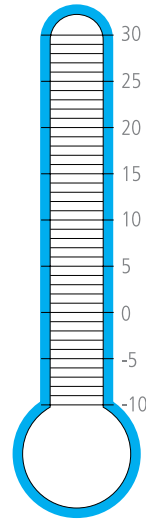
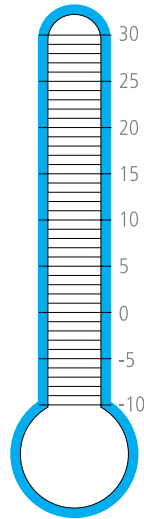
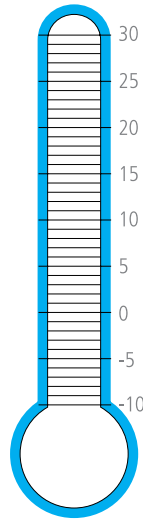
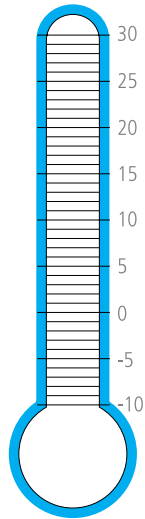
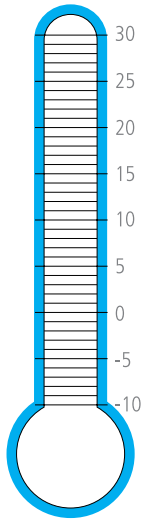


1 Afsæt temperaturer i termometrene.



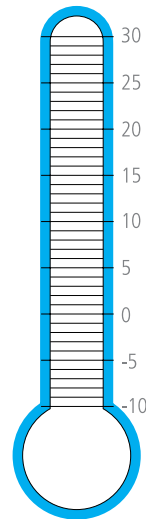
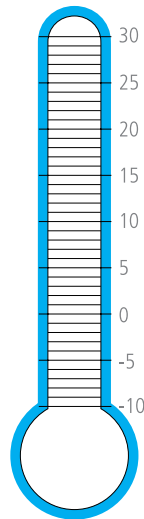
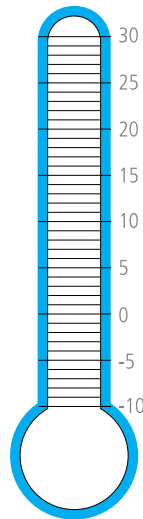
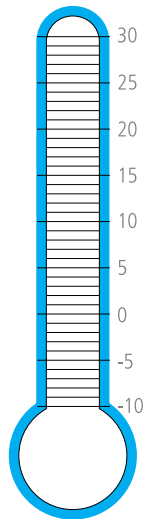
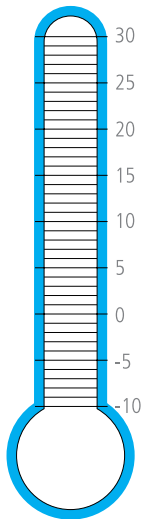
Mandag d. _____

Tirsdag d. _____

Onsdag d. _____

Torsdag d. _____

Fredag d. _____



Mandag d. _____

Tirsdag d. _____

Onsdag d. _____

Torsdag d. _____

Fredag d. _____



2 Find

a Den højest målte temperatur: _____

b Den lavest målte temperatur: _____

c Den største temperaturforskel: _____

d Den mindste temperaturforskel: _____